

1. Answer to the following questions :

a) In which year was the finite element method introduced ? Who are the authors of the first paper ?

The finite element method was first introduced by Turner, Clough, Martin, and Topp in 1956 using the displacement method to derive the stiffness of plane elements, and their paper is regarded as the first paper on the finite element method in engineering, while mathematicians believe that R. Courant introduced the method in 1943 under the name of the generalized finite difference method which is the approximation by 3 node triangular elements.

b) Who is the person named the finite element method ? When ?

In 1960, Clough named the method as the finite element method.

c) What is the isoparametric element ?

Isoparametric finite elements implies the expression of the element geometry (that is the transformation of the parametric and local coordinates) and the displacement approximation using the same shape functions and the nodal coordinates and displacements, respectively. A typical mathematical expression of this isoparametric element is as follows :

(geometry)

$$x = \sum_{i=1}^{N_e} x_i N_i(\mathbf{x}, \eta, \zeta), \quad y = \sum_{i=1}^{N_e} y_i N_i(\mathbf{x}, \eta, \zeta), \quad z = \sum_{i=1}^{N_e} z_i N_i(\mathbf{x}, \eta, \zeta)$$

(displacement)

$$u_x = \sum_{i=1}^{N_e} u_{x_i} N_i(\mathbf{x}, \eta, \zeta), \quad u_y = \sum_{i=1}^{N_e} u_{y_i} N_i(\mathbf{x}, \eta, \zeta), \quad u_z = \sum_{i=1}^{N_e} u_{z_i} N_i(\mathbf{x}, \eta, \zeta)$$

Here $(x_i \quad y_i \quad z_i)$ and $(u_{x_i} \quad u_{y_i} \quad u_{z_i})$ are the nodal coordinates and displacements, respectively, and N_e is the number of node in an element. Functions $N_i(\mathbf{x}, \eta, \zeta)$ are the shape functions which are polynomials of the parametric coordinates.

d) State the principle of minimum potential energy. Explain this principle using a spring model as shown in Fig. 1.

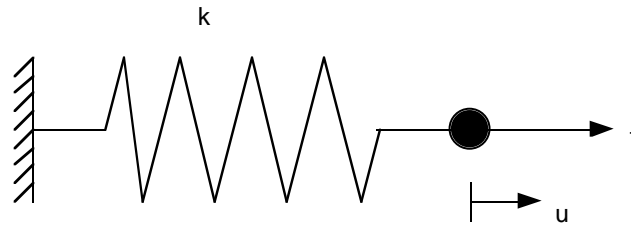


Figure 1. A Spring Model with A Single Degree of Freedom

Here k is the spring constant (stiffness), f is an applied load, and u is the amount of elongation or contraction.

The equilibrium state provides the minimum value of the total potential energy of a mechanical system. In the one degree spring mass system shown in above yields the total potential energy

$$\Pi = \frac{1}{2}ku^2 - fu.$$

Since it is convex (i.e. quadratic polynomial in u), the minimum of the total potential energy is characterized by vanishing of the first derivative of the total potential energy (i.e. zero gradient / slope) :

$$\frac{\partial \Pi}{\partial u} = ku - f = 0 \Leftrightarrow ku = f$$

e) Derive the stiffness of the bar element for axial loading and deformation. Here we assume that Young's modulus of the bar is E , cross sectional area is A , and the length of the bar is L , see Fig. 2.

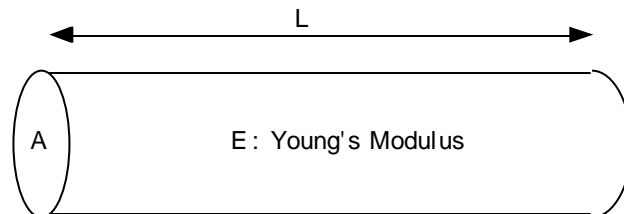


Figure 2. A Bar Element for Axial Loadings

Noting that

$$\sigma = E\varepsilon \Rightarrow \frac{P}{A} = E \frac{u}{L} \Rightarrow P = \frac{EA}{L}u$$

we can find the stiffness of the axially loaded bar :

$$k = \frac{EA}{L}.$$

2. Consider an 8 node hexagonal element shown in Fig. 3.

a) Define the shape functions $N_i(\xi, \eta, \zeta)$, $i = 1, 2, \dots, 8$ in terms of the parametric coordinates ξ, η , and ζ .

Shape functions of HEXA8 are given by

$$N_i(\xi, \eta, \zeta) = \frac{1}{8}(1 + \xi_i \xi)(1 + \eta_i \eta)(1 + \zeta_i \zeta)$$

where (ξ_i, η_i, ζ_i) are the nodal coordinates of the corner nodes in the parametric coordinate system. More precisely,

$$N_1(\xi, \eta, \zeta) = \frac{1}{8}(1 - \xi)(1 - \eta)(1 - \zeta)$$

$$N_2(\xi, \eta, \zeta) = \frac{1}{8}(1 + \xi)(1 - \eta)(1 - \zeta)$$

$$N_3(\xi, \eta, \zeta) = \frac{1}{8}(1 + \xi)(1 + \eta)(1 - \zeta)$$

$$N_4(\xi, \eta, \zeta) = \frac{1}{8}(1 - \xi)(1 + \eta)(1 - \zeta)$$

$$N_5(\xi, \eta, \zeta) = \frac{1}{8}(1 - \xi)(1 - \eta)(1 + \zeta)$$

$$N_6(\xi, \eta, \zeta) = \frac{1}{8}(1 + \xi)(1 - \eta)(1 + \zeta)$$

$$N_7(\xi, \eta, \zeta) = \frac{1}{8}(1 + \xi)(1 + \eta)(1 + \zeta)$$

$$N_8(\xi, \eta, \zeta) = \frac{1}{8}(1 - \xi)(1 + \eta)(1 + \zeta)$$

b) Evaluate N_4 at the centroid of the element, at the second node, and at the fourth node.

$$N_4(\xi, \eta, \zeta) = \frac{1}{8}(1 - \xi)(1 + \eta)(1 - \zeta) = \begin{cases} 1/8 & \text{at centroid} \\ 0 & \text{at node 2} \\ 1 & \text{at node 4} \end{cases}$$

c) Verify the property $\sum_{i=1}^8 N_i(\xi, \eta, \zeta) = 1$.

$$\begin{aligned}
 & \sum_{i=1}^8 N_i(\xi, \eta, \zeta) \\
 &= \frac{1}{8}(1-\xi)(1-\eta)(1-\zeta) + \frac{1}{8}(1+\xi)(1-\eta)(1-\zeta) \\
 &+ \frac{1}{8}(1+\xi)(1+\eta)(1-\zeta) + \frac{1}{8}(1-\xi)(1+\eta)(1-\zeta) \\
 &+ \frac{1}{8}(1-\xi)(1-\eta)(1+\zeta) + \frac{1}{8}(1+\xi)(1-\eta)(1+\zeta) \\
 &+ \frac{1}{8}(1+\xi)(1+\eta)(1+\zeta) + \frac{1}{8}(1-\xi)(1+\eta)(1+\zeta) \\
 &= \frac{1}{4}(1-\eta)(1-\zeta) + \frac{1}{4}(1+\eta)(1-\zeta) + \frac{1}{4}(1-\eta)(1+\zeta) + \frac{1}{4}(1+\eta)(1+\zeta) \\
 &= \frac{1}{2}(1-\zeta) + \frac{1}{2}(1+\zeta) = 1
 \end{aligned}$$

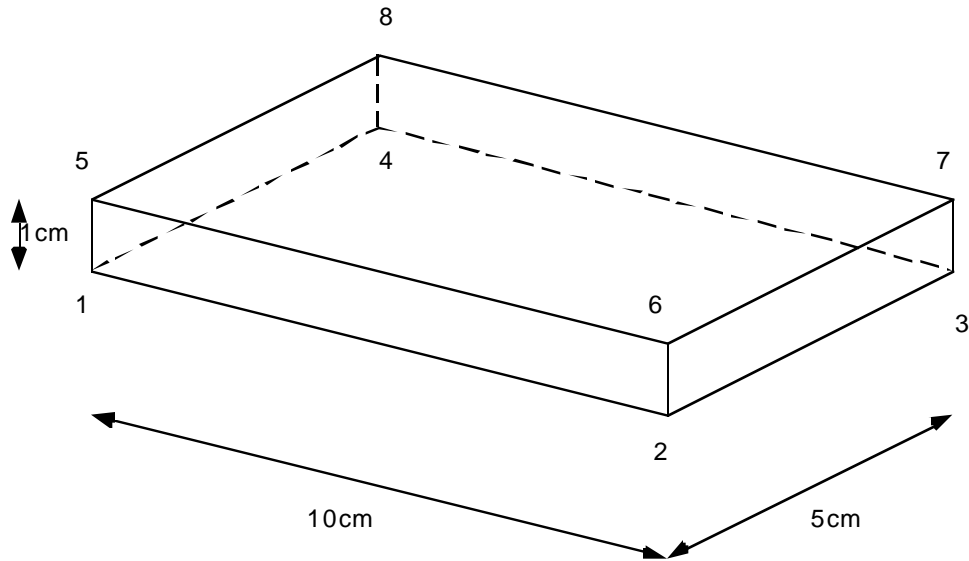
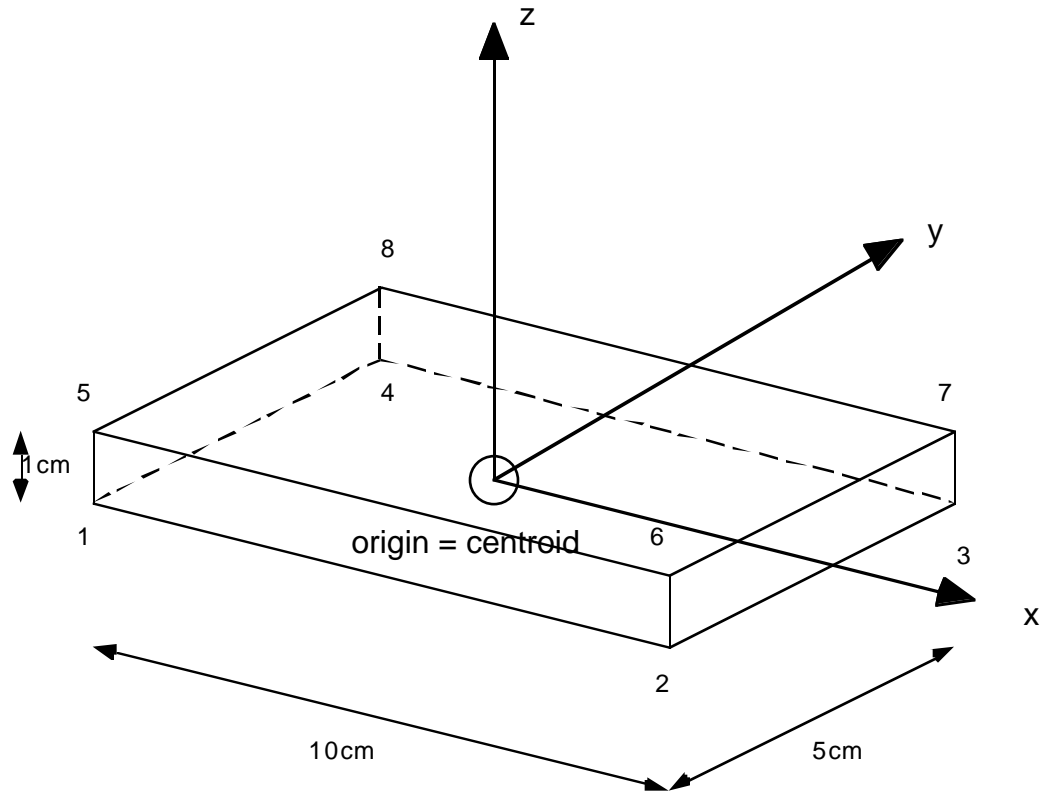


Figure 3. A 8 Node Hexagonal Element with Physical Dimensions

d) Sketch the local coordinate system (x,y,z) . Where is the origin ?



e) Using the differential relation to an arbitrary function g

$$\begin{Bmatrix} \frac{\partial g}{\partial \xi} \\ \frac{\partial g}{\partial \eta} \\ \frac{\partial g}{\partial \zeta} \end{Bmatrix} = \begin{bmatrix} \frac{\partial x}{\partial \xi} & \frac{\partial y}{\partial \xi} & \frac{\partial z}{\partial \xi} \\ \frac{\partial x}{\partial \eta} & \frac{\partial y}{\partial \eta} & \frac{\partial z}{\partial \eta} \\ \frac{\partial x}{\partial \zeta} & \frac{\partial y}{\partial \zeta} & \frac{\partial z}{\partial \zeta} \end{bmatrix} \begin{Bmatrix} \frac{\partial g}{\partial x} \\ \frac{\partial g}{\partial y} \\ \frac{\partial g}{\partial z} \end{Bmatrix}$$

compute

e1) the three displacement components $\{u_x \quad u_y \quad u_z\}$ in the local coordinate system

e2) the normal strain $\epsilon_x = \frac{\partial u_x}{\partial x}$, and the shear strain $\gamma_{xy} = \frac{\partial u_x}{\partial y} + \frac{\partial u_y}{\partial x}$

when

$$\mathbf{d}^T = \{0 \quad 0 \quad 0 \quad 0.01 \quad 0 \quad 0 \quad 0.01 \quad 0 \quad 0 \quad 0 \quad 0 \quad 0 \quad 0 \quad 0 \quad 0.01 \quad 0 \quad 0 \quad 0.01 \quad 0 \quad 0 \quad 0 \quad 0 \quad 0\}$$

f) Find the values of ϵ_x at the centroid and at node 7.

Noting that the displacement field given by the degrees of freedom given in above is characterized by

$$\begin{aligned} u_{x1} &= u_{x4} = u_{x5} = u_{x8} = 0 \\ u_{x2} &= u_{x3} = u_{x6} = u_{x7} = 0.01 \\ u_y &= u_z = 0 \quad \text{at every node} \end{aligned}$$

that is, only non-zero component is the one in the x direction, they implies that

- 1) zero axial displacement at the left face 1-4-8-5 (i.e. plane $\xi = -1$)
- 2) 0.01 axial displacement at the right face 2-3-7-6 (i.e. plane $\xi = +1$)

in the right direction. Therefore, the displacement components are given by

$$\begin{aligned} u_x &= \sum_{i=1}^8 u_{xi} N_i(\xi, \eta, \zeta) \\ &= 0.01 \left\{ \frac{1}{8}(1+\xi)(1-\eta)(1-\zeta) + \frac{1}{8}(1+\xi)(1+\eta)(1-\zeta) \right. \\ &\quad \left. + \frac{1}{8}(1+\xi)(1-\eta)(1+\zeta) + \frac{1}{8}(1+\xi)(1+\eta)(1+\zeta) \right\} \\ &= 0.01 \left\{ \frac{1}{4}(1+\xi)(1-\eta) + \frac{1}{4}(1+\xi)(1+\eta) \right\} \\ &= 0.01 \times \frac{1}{2}(1+\xi) \end{aligned}$$

and

$$u_y = u_z = 0.$$

Furthermore, the element is rectangular parallelepiped, we have

$$\begin{aligned} x &= -5 \times \frac{1}{2}(1-\xi) + 5 \times \frac{1}{2}(1+\xi) = 5\xi \\ y &= -2.5 \times \frac{1}{2}(1-\eta) + 0.25 \times \frac{1}{2}(1+\eta) = 2.5\eta \\ z &= -0.5 \times \frac{1}{2}(1-\zeta) + 0.5 \times \frac{1}{2}(1+\zeta) = 0.5\zeta \end{aligned}$$

Thus, the normal strain ϵ_x and shear strain γ_{xy} become

$$\epsilon_x = \frac{\partial u_x}{\partial x} = \frac{\partial \xi}{\partial x} \frac{\partial u_x}{\partial \xi} = \frac{1}{5} \frac{0.01}{2} = 0.001$$

$$\gamma_{xy} = \frac{\partial u_x}{\partial y} + \frac{\partial u_y}{\partial x} = 0$$

respectively.

That is, the normal strain ϵ_x is constant in the element, i.e. 0.001 at the centroid and node 7.